



FAI UN PO' DI  
OPERAZIONI  
CON LE MIE  
MAGI-MACCHINE!

$$13 + 5 = \square$$

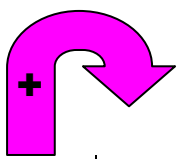
$$17 + 2 = \square$$

$$9 + 8 = \square$$

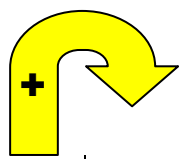
$$18 - 9 = \square$$

$$15 - 6 = \square$$


$$17 - 7 = \square$$




4	8
0	
6	
1	
5	
3	



5	10
0	
4	
2	
1	
9	



17	15
9	
14	
16	
5	
19	



18	
8	
13	
20	
12	
10	