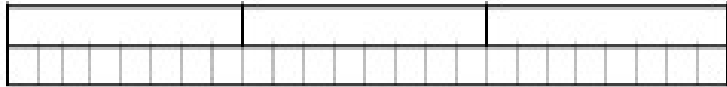


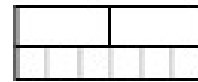


$5 \times 2 =$
 $5 + 5 =$

Colora i regoli della riga sopra, poi ripassa i quadratini di quella sotto e contali per scoprire il prodotto della moltiplicazione (e dell' addizione ripetuta).




$x =$



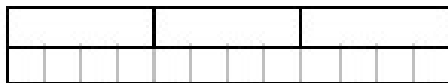
$x =$



$x =$



$x =$



$x =$



$x =$

